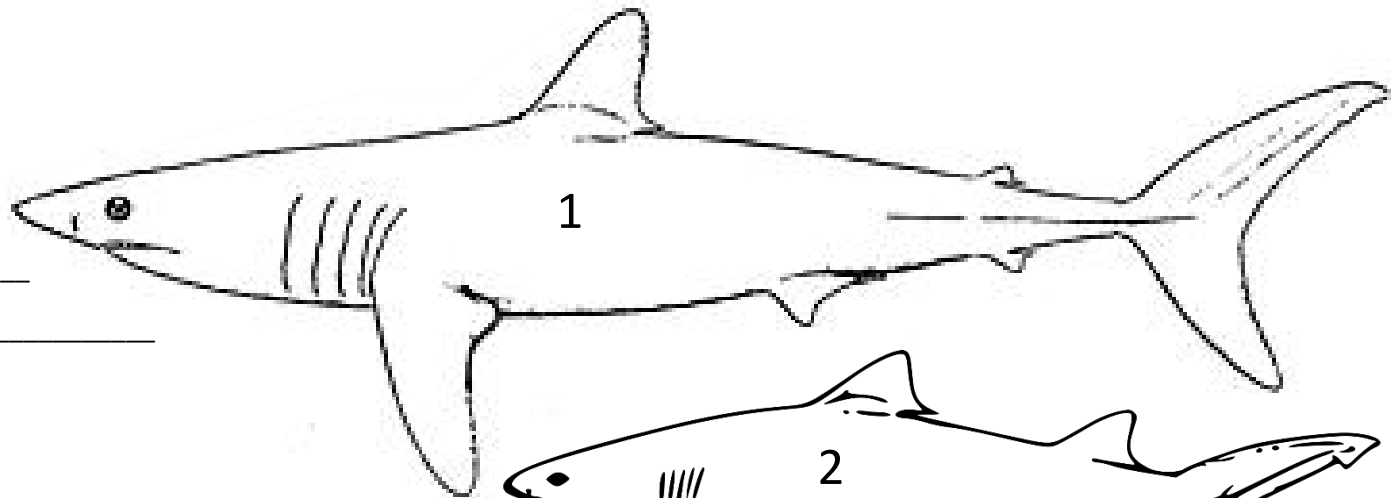


Shark Size

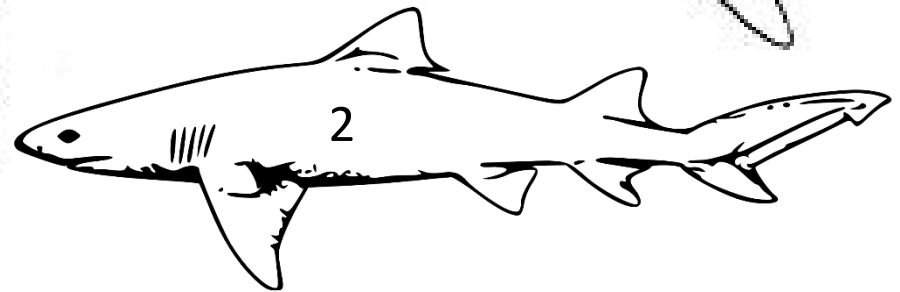
2.MD.A 2.MD.B

Directions: Use a measuring tape to measure the sharks' length to the nearest inch and centimeter



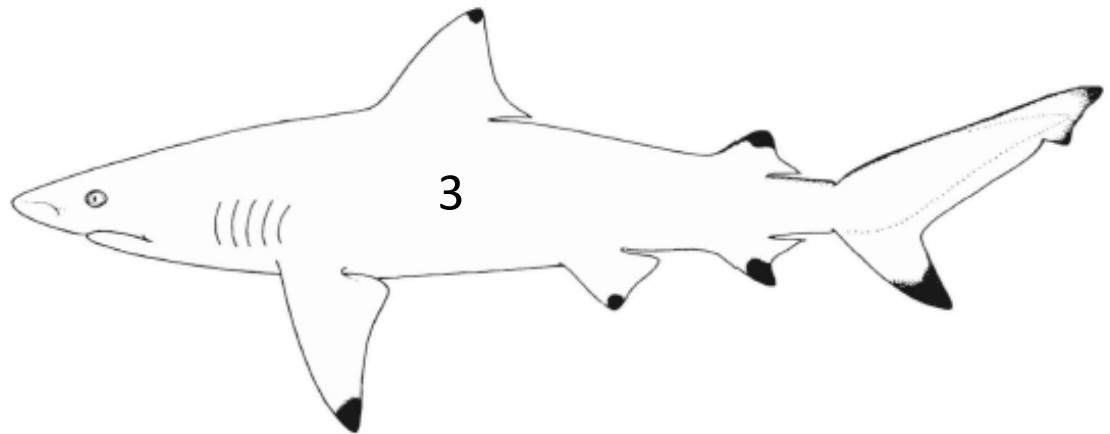
How many inches? _____

How many centimeters? _____



How many inches? _____

How many centimeters? _____



How many inches? _____

How many centimeters? _____



Shark Size

2.MD.A; 2.MD.B

Directions: Answer the following questions using the shark sizes you measured.

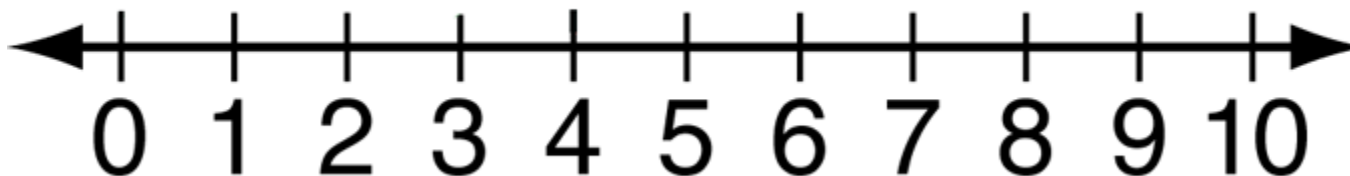
1. What number shark is the biggest?

2. What number shark is the smallest?

3. How many more centimeters is shark 1 than shark 3?

4. How many more inches is shark 1 than shark 2?

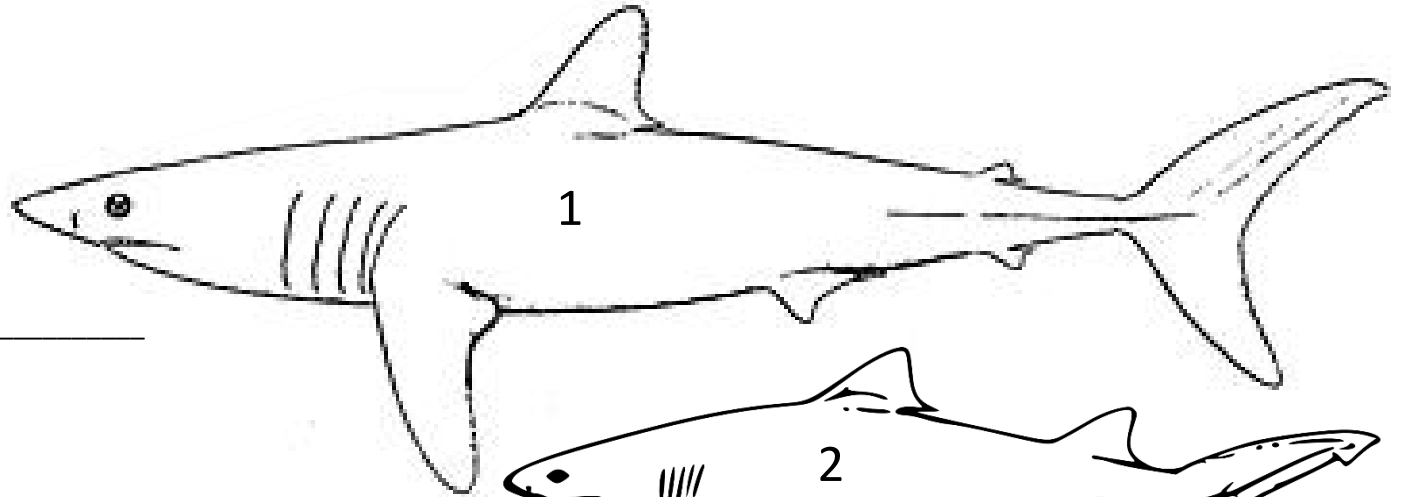
5. Use the number line to compare the three shark sizes in inches:



Shark Size Answer Key

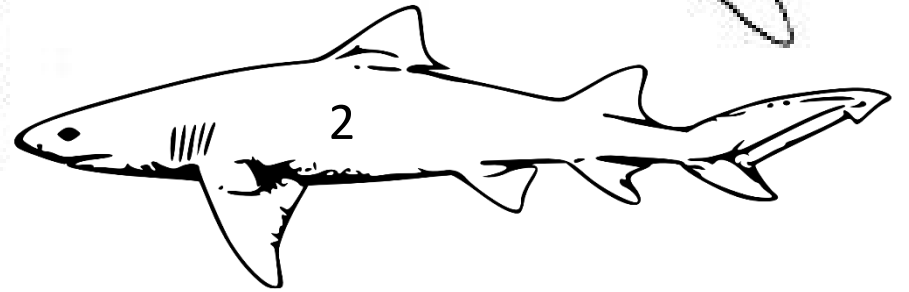
2.MD.A 2.MD.B

Directions: Use a measuring tape to measure the sharks' length to the nearest inch and centimeter



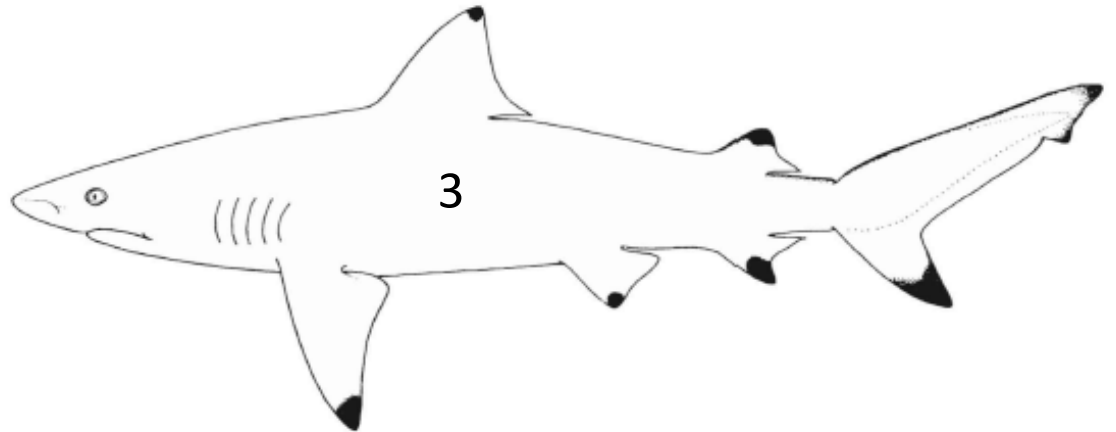
How many inches? ___ 8 inches ___

How many centimeters? _ 20 centimeters _____



How many inches? ___ 5 inches ___

How many centimeters? _ 13 centimeters _____



How many inches? __ 6 inches _____

How many centimeters? ___ 15 centimeters _____



Shark Size Answer Key

2.MD.A; 2.MD.B

Directions: Answer the following questions using the shark sizes you measured.

1. What number shark is the biggest?

Shark 1 is the biggest shark.

2. What number shark is the smallest?

Shark 2 is the smallest shark.

3. How many more centimeters is shark 1 than shark 3?

Shark 1 is 5 centimeters longer than shark 3.

4. How many more inches is shark 1 than shark 2?

Shark 1 is 3 inches longer than shark 2

5. Use the number line to compare the three shark sizes in inches:

